

ALUNO: _____

SÉRIE: 1º TURNO: Manhã / Tarde DATA: 05 / 05 / 2020

PROFESSORA: _____ DISCIPLINA: Revisão de Matemática - Sala


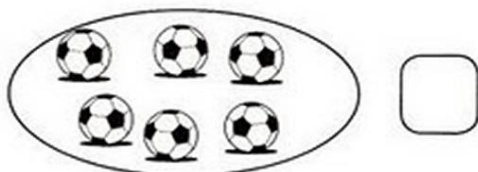
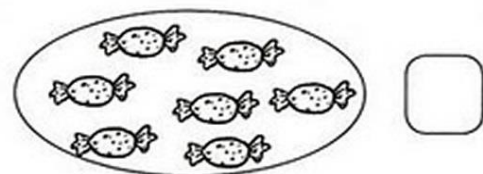

1 – Represente por meio de desenhos as quantidades para os numerais abaixo.

12


9

20


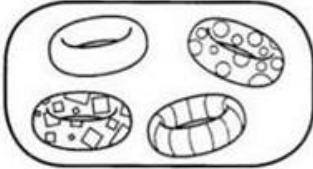
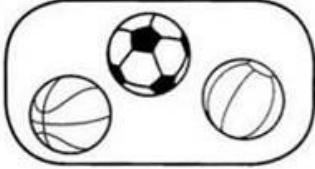

2 – Conte os elementos de cada conjunto escrevendo o numeral correspondente ao lado.







3 – Que lindas borboletas! Há de todas as cores! Pinte cinco borboletas com cores variadas.



4 – Faça um X no numeral corresponde à quantidade representada em cada conjunto.

	<input type="radio"/> 2	<input type="radio"/> 4		<input type="radio"/> 1	<input type="radio"/> 5
	<input type="radio"/> 1	<input type="radio"/> 5		<input type="radio"/> 4	<input type="radio"/> 3
	<input type="radio"/> 5	<input type="radio"/> 3		<input type="radio"/> 3	<input type="radio"/> 5
	<input type="radio"/> 2	<input type="radio"/> 4		<input type="radio"/> 1	<input type="radio"/> 2

5 – Pinte o conjunto que está representando a maior quantidade de elementos.

			
--	--	---	--