



ALUNO: \_\_\_\_\_

SÉRIE: 3º ano TURNO: MANHÃ

DATA: 18 / 05 / 2020


PROFESSORA: VERIDIANA

DISCIPLINA: MATEMÁTICA

1. Resolva as adições.

**A**

4	8	5
+	2	3
<hr/>		



**B**


6	7	7
+		9
<hr/>		

**C**

3	5	0
+	1	2
<hr/>		

**D**

9	3	8
+		1
<hr/>		



**E**


2	2	2
+	1	3
<hr/>		

**F**

7	2	3
+	2	6
<hr/>		

**G**

8	0	8
+	1	4
<hr/>		



**H**

1	6	7
+		9
<hr/>		

**I**

5	2	1
+	2	1
<hr/>		