

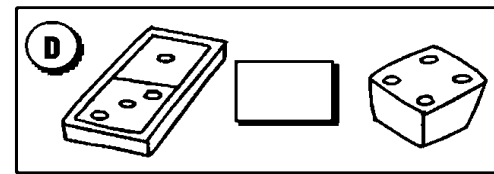
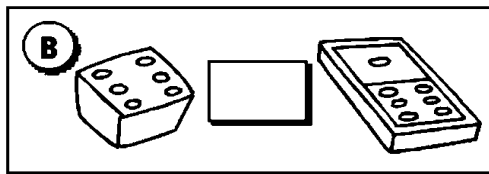
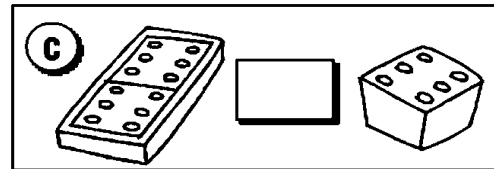
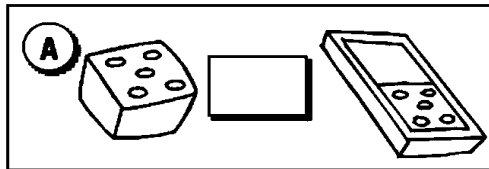
ALUNO: _____

SÉRIE: 1º TURNO: Manhã / Tarde

DATA: 12 / 06 / 2020

PROFESSORA: _____ DISCIPLINA: Matemática – Casa

1 – Use o sinal de igual ou diferente, conforme a quantidade de pontos.



2 – Coloque o numeral correspondente para cada conjunto, depois escreva o sinal de igual ou diferente. Veja o exemplo.

