

ALUNO: _____


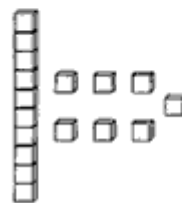

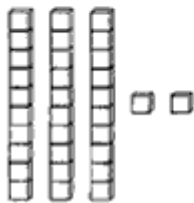


SÉRIE: 1º TURNO: Manhã / Tarde

DATA: 23 / 06 / 2020


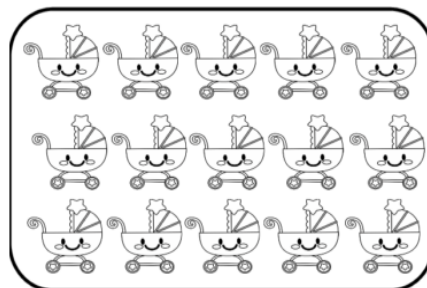

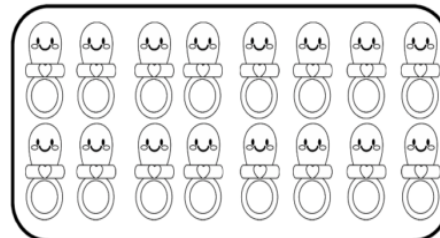

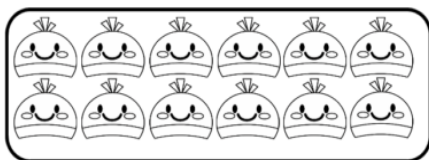
PROFESSORA: _____

DISCIPLINA: Matemática – Casa

1 – Através das numerações, descubra os numerais.



2 – Conte e circule 10 elementos em cada conjunto. Anote quantas dezenas e quantas unidades há em cada.



3 – Decomponha os números em dezenas e unidades.

25	15	7	21																
<table border="1"><tr><td>D</td><td>U</td></tr><tr><td> </td><td> </td></tr></table>	D	U			<table border="1"><tr><td>D</td><td>U</td></tr><tr><td> </td><td> </td></tr></table>	D	U			<table border="1"><tr><td>D</td><td>U</td></tr><tr><td> </td><td> </td></tr></table>	D	U			<table border="1"><tr><td>D</td><td>U</td></tr><tr><td> </td><td> </td></tr></table>	D	U		
D	U																		
D	U																		
D	U																		
D	U																		
3	13	20	4																
<table border="1"><tr><td>D</td><td>U</td></tr><tr><td> </td><td> </td></tr></table>	D	U			<table border="1"><tr><td>D</td><td>U</td></tr><tr><td> </td><td> </td></tr></table>	D	U			<table border="1"><tr><td>D</td><td>U</td></tr><tr><td> </td><td> </td></tr></table>	D	U			<table border="1"><tr><td>D</td><td>U</td></tr><tr><td> </td><td> </td></tr></table>	D	U		
D	U																		
D	U																		
D	U																		
D	U																		
9	11	22	6																
<table border="1"><tr><td>D</td><td>U</td></tr><tr><td> </td><td> </td></tr></table>	D	U			<table border="1"><tr><td>D</td><td>U</td></tr><tr><td> </td><td> </td></tr></table>	D	U			<table border="1"><tr><td>D</td><td>U</td></tr><tr><td> </td><td> </td></tr></table>	D	U			<table border="1"><tr><td>D</td><td>U</td></tr><tr><td> </td><td> </td></tr></table>	D	U		
D	U																		
D	U																		
D	U																		
D	U																		

4 – Pinte de amarelo os quadrinhos para representar as quantidades abaixo.

17	13	15	11	19																																																																																
<table border="1"><tr><td> </td></tr><tr><td> </td></tr><tr><td> </td></tr><tr><td> </td></tr><tr><td> </td></tr><tr><td> </td></tr><tr><td> </td></tr><tr><td> </td></tr><tr><td> </td></tr><tr><td> </td></tr><tr><td> </td></tr><tr><td> </td></tr><tr><td> </td></tr><tr><td> </td></tr><tr><td> </td></tr><tr><td> </td></tr></table>																	<table border="1"><tr><td> </td></tr><tr><td> </td></tr><tr><td> </td></tr><tr><td> </td></tr><tr><td> </td></tr><tr><td> </td></tr><tr><td> </td></tr><tr><td> </td></tr><tr><td> </td></tr><tr><td> </td></tr><tr><td> </td></tr><tr><td> </td></tr><tr><td> </td></tr><tr><td> </td></tr><tr><td> </td></tr><tr><td> </td></tr></table>																	<table border="1"><tr><td> </td></tr><tr><td> </td></tr><tr><td> </td></tr><tr><td> </td></tr><tr><td> </td></tr><tr><td> </td></tr><tr><td> </td></tr><tr><td> </td></tr><tr><td> </td></tr><tr><td> </td></tr><tr><td> </td></tr><tr><td> </td></tr><tr><td> </td></tr><tr><td> </td></tr><tr><td> </td></tr><tr><td> </td></tr></table>																	<table border="1"><tr><td> </td></tr><tr><td> </td></tr><tr><td> </td></tr><tr><td> </td></tr><tr><td> </td></tr><tr><td> </td></tr><tr><td> </td></tr><tr><td> </td></tr><tr><td> </td></tr><tr><td> </td></tr><tr><td> </td></tr><tr><td> </td></tr><tr><td> </td></tr><tr><td> </td></tr><tr><td> </td></tr><tr><td> </td></tr></table>																	<table border="1"><tr><td> </td></tr><tr><td> </td></tr><tr><td> </td></tr><tr><td> </td></tr><tr><td> </td></tr><tr><td> </td></tr><tr><td> </td></tr><tr><td> </td></tr><tr><td> </td></tr><tr><td> </td></tr><tr><td> </td></tr><tr><td> </td></tr><tr><td> </td></tr><tr><td> </td></tr><tr><td> </td></tr><tr><td> </td></tr></table>																

