


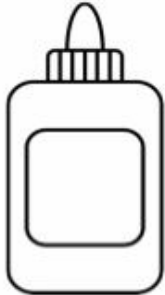


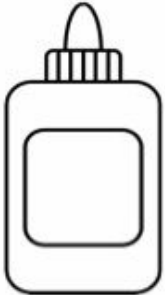
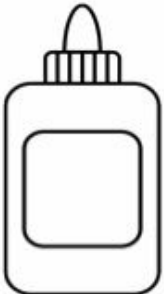



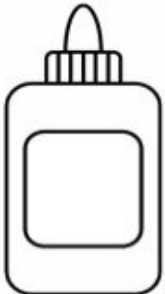
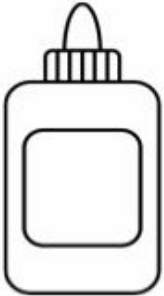

Colégio: \_\_\_\_\_

Infantil IV – Professora: \_\_\_\_\_ Turno: Manhã/ Tarde Data: \_\_\_\_/\_\_\_\_/\_\_\_\_

Aluno (a): \_\_\_\_\_

ATIVIDADE DE MATEMÁTICA

- OBSERVE A SEQUÊNCIA NUMÉRICA E COMPLETE COM OS NÚMEROS QUE FALTAM.

 <b>19</b>			 <b>22</b>	
	 <b>25</b>		 <b>27</b>	
	 <b>30</b>	